











October



Kindergarten

Sunday	Monday	Tuesday	Wednesday	Thursday	Friday	Saturday
	<p>1 Name the shape below.</p> 	<p>2 Write the numbers that are between 0 and 20.</p>	<p>3 Amy found a coin on the playground. It looked like this. What is this coin?</p> 	<p>4 Clap your hands 6 times. Jump up and down 3 times. Stomp your feet 2 times. Can you make this in to a pattern?</p>	<p>5 What is missing?</p> 	<p>6 Count to 100 by tens.</p>
<p>7 How many cardinals do you see?</p> 	<p>8 Who has more letters in their first name? You or your mom or dad?</p>	<p>9 How many pieces of candy do you see?</p> 	<p>10 How many bears do you see?</p> 	<p>11 Start at 20 and count to 40.</p>	<p>12 Draw enough squares to match your age.</p>	<p>13 How many days are in each week? Name them all.</p>
<p>14 Draw six pumpkins.</p>	<p>15 Sam wants to give each of his friends a balloon. He has five friends and seven balloons. Will he have enough?</p>	<p>16 Mike has 8 pieces of candy. Mark has 10 pieces of candy. Who has more?</p>	<p>17 Name this coin. What is its value?</p> 	<p>18 Niki is 6 years old. Alex is 8 years old. Who is older?</p>	<p>19 Six scarecrows are in my yard. Three have hats. How many don't have hats?</p> 	<p>20 Jim has 4 friends playing in his yard. If 2 of the friends go next door to play, how many friends will be at Jim's?</p>
<p>21 Ryan has 4 pumpkins. Eric has 7 pumpkins. Who has less?</p>	<p>22 Draw 8 circles.</p>	<p>23  How many blocks are there?</p>	<p>24 Name the coin that is worth 25 cents.</p>	<p>25 Ella carved 3 pumpkins and her dad carved 1. How many jack-o-lanterns did they make?</p>	<p>26 Which season is it today? Which season comes next?</p>	<p>27 Name two groups of numbers that equal five when put together.</p>
<p>28 Draw two equal sets of triangles.</p>	<p>29 Count aloud to 50.</p>	<p>30 Jim has two groups of cars. Altogether he has 8 cars. How many could be in each group?</p>	<p>31 Elle has 3 caramel squares and 4 peanut butter cups. How many pieces of candy does Elle have?</p>		