











October



1st Grade

Sunday	Monday	Tuesday	Wednesday	Thursday	Friday	Saturday
	1 Draw a pentagon.	2 Alex has 4 footballs. He gives 2 to Max. How many footballs does Alex have left? 	3 List three number sentences that equal ten.	4  How are these two polygons different?	5 Draw a picture that has a hexagon below a trapezoid.	6 Claire picked 4 pumpkins in the pumpkin patch. Grace picked 3. Who picked more? How do you know?
7 Jessie has 10 cookies. She wants to share them equally with Joe. How many cookies should she give Joe?	8 Name the day of the week for October 29th.	9 Louis has a party to attend on the fourth Saturday of October. What is the date of the party?	10 How many pieces of candy do I have? 	11 Count by 5s to 100.	12 The answer is 8. What is the question?	13 Name three things that are shaped like a triangle.
14 Do you see the prize on the right side or the left side? 	15 If I begin at 13 on a number line and end at 20, how many spaces did I jump?	16 Would you eat breakfast at 7:00 am or 7:00 pm?	17 How many donuts are in one dozen?	18 Make a set that is equal to my ice cream cones. 	19 There are 12 girls on the bus and 4 boys on the bus. How many children are on the bus?	20 Anna ran for 5 minutes. She played tennis for 30 minutes and read a story for 10 minutes. Which activity took the least amount of time?
21 What is the time? 	22 Name the months of the year?	23 Cara has 16 apples. If she gives 7 apples to her grandma, how many will she have?	24 Solve $12 - 5 = \underline{\quad}$ $10 - 4 = \underline{\quad}$ $8 - 5 = \underline{\quad}$ $14 - 7 = \underline{\quad}$	25 How many triangles fit inside a hexagon? 	26 What is the time? 	27 Does it take longer to eat a hot dog or to play a football game?
28 $4 + 2 + 1 =$ $3 + 7 + 4 =$ $1 + 9 + 2 =$	29 What fraction of the hexagon is dark? 	30 Which is longer? a shoelace or a pencil a crayon or a ruler	31 Which is shorter? A tree or a dog A door or a trashcan 