





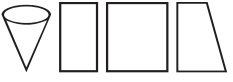
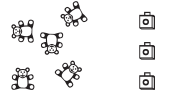






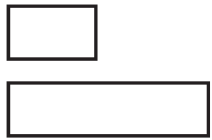


Sunday	Monday	Tuesday	Wednesday	Thursday	Friday	Saturday
			<p>Begin at 10 and count out loud to 20.</p>	<p>Name the number that comes after 11 when you count.</p>	<p>How many bears do you see?</p> 	<p>Name this coin.</p> 
<p>Find 6 objects in your house that are square shaped.</p>	<p>Jan has 4 stuffed dogs and 3 dolls on her shelf. Are there more dogs or dolls on her shelf?</p>	<p>Name this shape.</p> 	<p>Name two things that are circle shaped.</p>	<p>Draw a square below the snowman.</p> 	<p>How many groups of ten are in 15? How many groups of ten are in 25?</p>	<p>Name this number.</p> <p style="font-size: 2em; text-align: center;">7</p>
<p>Which one does not belong in this group?</p> 	<p>Do you see more cubes or bears?</p> 	<p>Write your name 5 times.</p>	<p>My dog is 4 years old. My cat is 9 years old. Which pet is younger?</p>	<p>Is triangle above, beside, or below the rectangle?</p> 	<p>Draw 3 squares. Draw 4 triangles. How many shapes do you have all together?</p>	<p>Kelly has 5 green crayons and 4 red crayons. Which color does she have the least of?</p>
<p>Is the hexagon above, below or next to the rectangle?</p> 	<p>Name this coin.</p> 	<p>Name this figure.</p> 	<p>There are 2 snowmen in my yard. Each one has 3 buttons on his chest. How many buttons did I use on my snowmen?</p>	<p>Name 3 things in your house that are cubes.</p>	<p>Name the shapes used to make this hexagon.</p> 	<p>Name the number.</p> 
<p>Name the number that is one more than 18.</p>	<p>Which shape has 6 corners? What is another name for a corner?</p>	<p>Draw 2 circles. Draw 1 hexagon. How many shapes do you have?</p>	<p>Which is longer?</p> 	<p>Draw a picture that has 1 rectangle, 2 squares, and 2 triangles.</p>	