






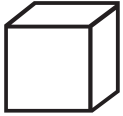


Sunday	Monday	Tuesday	Wednesday	Thursday	Friday	Saturday
			<p>1 What is a sum? 2</p>	<p>3 Chris has 2 sisters and 1 brother in his family. How many children are in his family?</p>	<p>4 How many beans are in this square?</p> 	<p>5 Draw a pattern that uses triangles and circles.</p>
<p>6 Begin at 21 and count to 32.</p>	<p>7 Macy is four years older than her sister, Kate. If Kate is 2 years old, how old is Macy?</p>	<p>8 Name the number that has 2 tens and 3 ones.</p>	<p>9 Write the number that represents five.</p>	<p>10 How many groups of 10 make the number 50?</p>	<p>11 Which number is greater? 12 or 10 3 or 8 22 or 12</p>	<p>12 Count out loud from 1 to 50.</p>
<p>13 Name the number that is one more than 12 and ten less than 23.</p>	<p>14 Debbie has 3 pets. One of her pets is a dog and the others are cats. How many cats does Debbie have?</p>	<p>15 Write the number that is equal to 2 tens and 3 ones.</p>	<p>16 Name this shape.</p> 	<p>17 Count by 10s to 100.</p>	<p>18 Add the two groups of bears to find the total number of bears.</p> 	<p>19 Which is less? 3 or 10 21 or 12 5 or 2</p>
<p>20 Write the numbers 1-10 three times. Use your best handwriting.</p>	<p>21 What time is shown on the clock?</p> 	<p>22 Write the number that is ten less than 28.</p>	<p>23 Wyatt has 17 tennis balls and Tom has 13 tennis balls. Who has the least amount of tennis balls?</p>	<p>24 8 birds are in the tree. 5 fly away. How many birds are left in the tree?</p>	<p>25 Write the number that is equal to 3 tens and 0 ones.</p>	<p>26 Add $4 + 2 =$ $1 + 4 =$ $3 + 3 =$</p>
<p>27 Write three numbers that are even.</p>	<p>28 Add the two groups of tiles to find the total number of tiles.</p> 	<p>29 Name this figure</p> 	<p>30 Write the number that is equal to 1 ten and 2 ones.</p>	<p>31 What time is shown on the clock?</p>	